



DELHI PUBLIC SCHOOL UDHAMPUR

NAME:- _____

CLASS:- 1st ()

" I heard the bells on Christmas day

Their old familiar carols play

And wild and sweet


The words repeat

Of peace on earth, Good will to men"

HAPPY NEW YEAR 2019

With this note we wish our students great vacations our only request to parents is to enjoy the winter but its too cold also, so do take care of our tiny to tots.

HAPPY WINTER VACATIONS



Winter holidays begin from 1st Jan, 2019. School will reopens on 16th Jan 2019

SUBJECT:- ENGLISH

STORY WRITING

THE ANT AND THE GRASSHOPPER

Q1. Complete the story with the help of clues given in the box below.

Two relax garden guitar work cold hungry



There were ____ best friends – an ant and a grasshopper. The grasshopper liked to ____ the whole day and play his guitar. The ant, however, would work hard all day. He would collect food from all corners of the ____ while the grasshopper relaxed, or played his ____, or slept. The grasshopper would tell the ant to take a break every day, but the ant would refuse and continue his _____. Soon, winter came. The days and nights became ____ and very few creatures went out. The grasshopper couldn't find any food and was _____ all the time. However, the ant had enough food for him to last through the winter without any worries at all.

COMPREHENSION

Q . Read the passage carefully and answer the following questions: -

Roy likes to play in the rain. When it rains, he puts on his raincoat and boots. He goes outside. Roy splashes in the puddle. Roy must think that he is a duck. Sometimes, Meyer plays in the rain with Roy.

1. What does Roy like to play in?

2. What does Roy put on when it rains?

3. Where does Roy go?

4. What Roy think he is ?

5. Write the plural of raincoat.



Look at these pictures. What are the people doing?
Fill in the blanks and complete each *doing* word.



ea _ _ ing



ru _ _ n _ _ g



c _ _ king



d _ _ _ ing



st _ _ n _ _ ing



si _ _ _ ing




r _ _ _ _ ing



p _ _ _ _ ing



sl _ _ _ _ ng





Rewrite the following sentences using capital letters (ABC), full stop (.), and question marks (?) at suitable places.

1. what is your name

.....

2. who teaches you hindi

.....

3. why are you always late

.....

4. where do you live

.....

5. my name is namita

.....

6. i study in a school near my house

.....

7. my sister risha is very naughty.

.....

8. we have holidays in may and june.

.....

9. i love to be with my father on sundays.

.....





देखें, क्या समझा

1. नीचे दिए गए चित्रों में हो रही क्रियाएँ लिखो—



.....
उड़ना



.....



.....



.....



.....



.....

2. उचित क्रिया शब्द भरकर वाक्य पूरे करो—

क. मैं बाजार हूँ।

(भागता, जाता)

ख. कमरे में पंखा रहा है।

(चल, दौड़)

ग. शिखा टेलीविजन रही थी।

(सुन, देख)

घ. मछलियाँ रही हैं।

(कूद, तैर)

ङ. तुम लोग कब ?

(खाए, आए)

च. अध्यापक रहे हैं।

(पढ़ा, सुला)



फलों और सब्जियों के नाम पहचानकर लिखो--

लौकी आलू मटर गाजर टमाटर केला
आम पपीता सेब संतरा अंगूर



SUBJECT:- E.V.S

A. Multiple choice questions.

1. Which of the following we cannot see at night?
(a) Moon (b) Stars
(c) Sun (d) All the above
2. What is the colour of the sky during the day?
(a) Red (b) Yellow
(c) Blue (d) Green
3. Which natural body changes its shape every day?
(a) Stars (b) Sun
(c) Moon (d) All the above

B. Fill in the blanks.

sun, sky, shape, night,

1. The _____ is like a huge ball of fire.
2. The moon changes its _____ every night.
3. We can see the moon and stars at _____.
4. The _____ looks blue in colour during the day.

C True or False,

1. The moon is bigger than the sun
2. The sun is like a huge ball of fire.
3. We see the sun at night.
4. The little bodies that twinkle all over the sky are stars.

<input type="checkbox"/>
<input type="checkbox"/>
<input type="checkbox"/>
<input type="checkbox"/>



A. Fill in the blanks.

1. We should always use a _____ to cross the road.
2. We should not touch any _____ item with wet hands.
3. We should not talk to _____.
4. We should have a _____ kit at home and at school.

B. Circle the correct options.

1. We should stay away from/play with sharp objects.
2. We should/should not touch any electrical item with wet hands.

Write True or False.

- (a) We should play with sharp objects.
- (b) We should walk on the footpath.
- (c) We should play on the road.
- (d) Safety rules keep us safe.





1. Tick the correct option.

1. Flat areas of land are called

- (a) River (b) Hills (c) Plains

2. Globe is a model of

- (a) Air (b) Earth (c) Water

3. It is present everywhere

- (a) Land (b) Water (c) Air

2. Complete the sentences.

- (a) The shape of the earth is _____
- (b) The land between hills or mountains is called _____
- (c) The main source of water is _____
- (d) Moving air is called _____

3. Write True or False.

- (a) Model of the earth is called a map.
- (b) Sea water is fresh water.
- (c) Some mountains peaks are covered with snow.
- (d) All animals live on the land.



SUBJECT:- MATHS

Q1. Fill in the blanks:

(a) There are _____ days in a week.

(b) There are _____ months in a year.

(c) There are _____ days in a year.

(d) The months of the year are:

Q2. Fill the correct answer:

(a) _____ comes in between Thursday and Saturday.

(b) _____ comes before April.

(c) _____ comes after August.

(d) _____ is the last month of the year.

(e) August is the _____ month of the year.

(f) _____ and _____ are the month of summer vacations.

Multiplication Color By Number

Once you have solved the multiplication problems on the right, you can color in the parrot using the color that is listed under each answer.

$2 \times 8 = \underline{\quad}$
red

$1 \times 3 = \underline{\quad}$
yellow

$9 \times 4 = \underline{\quad}$
lime green

$2 \times 9 = \underline{\quad}$
green

$5 \times 6 = \underline{\quad}$
blue

$6 \times 7 = \underline{\quad}$
orange

$3 \times 4 = \underline{\quad}$
brown

$7 \times 7 = \underline{\quad}$
tan

Q1. Multiply: -

1) 4

$$\begin{array}{r} \times 4 \\ \hline \end{array}$$

2) 3

$$\begin{array}{r} \times 4 \\ \hline \end{array}$$

3) 8

$$\begin{array}{r} \times 9 \\ \hline \end{array}$$

4) 6

$$\begin{array}{r} \times 7 \\ \hline \end{array}$$

5) 7

$$\begin{array}{r} \times 5 \\ \hline \end{array}$$

6) 5

$$\begin{array}{r} \times 8 \\ \hline \end{array}$$

7) 8

$$\begin{array}{r} \times 6 \\ \hline \end{array}$$

8) 9

$$\begin{array}{r} \times 8 \\ \hline \end{array}$$

9) 6

$$\begin{array}{r} \times 4 \\ \hline \end{array}$$

10) 7

$$\begin{array}{r} \times 8 \\ \hline \end{array}$$

11) 9

$$\begin{array}{r} \times 9 \\ \hline \end{array}$$

12) 5

$$\begin{array}{r} \times 7 \\ \hline \end{array}$$



1. Colour the one which holds more.

Computer

Q:1. Match the following:

Option use to Exit
from Tux Paint

Fish Cascade game
has how many
levels of difficulty

Application menu

Three

Quit Option

Full screen

Tux typing works
in which mode

To start Tux
Typing click
which menu

Computer

Q:1. Write the keyboard shortcut for the following:

1. Open a document
2. Create a New document
3. Save a document

Q:2. Answer the following:

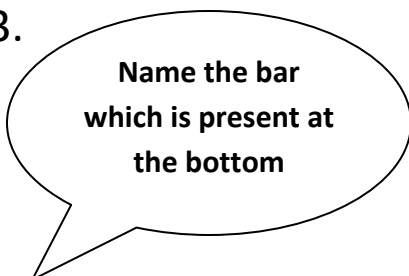
1.



2.



3.



Computer

Q:1. How many buttons a mouse has?

Ans: _____

Q:2. Which bar is present at the bottom of the screen?

Ans: _____

Q:3. Which click is used to see a list of things?

Ans: _____

Q:4. Where we kept the mouse?

Ans: _____

Q:5. What is clicking?

Ans: _____

Q:6. Which option will you click if you want to exit from Tux paint?

Ans: _____

Q:7. Which option will you click to play a game that feeds food to Tux?

Ans: _____