



DELHI PUBLIC SCHOOL UDHAMPUR

NAME:- _____

CLASS:- 3rd ()

" I heard the bells on Christmas day

Their old familiar carols play

And wild and sweet


The words repeat

Of peace on earth, Good will to men"

HAPPY NEW YEAR 2019

With this note we wish our students great vacations our only request to parents is to enjoy the winter but its too cold also, so do take care of our tiny to tots.

HAPPY WINTER VACATIONS



Winter holidays begin from 1st Jan, 2019. School will reopens on 16th Jan 2019



DELHI PUBLIC SCHOOL UDHAMPUR

Subject:- English

NAME: _____

CLASS:3

Fill in the blanks with correct conjunction.

1. The ant helped the dove _____ the pigeon.

(and, or)

2. Jill played the game well _____ won the trophy.

(and, but)

3. Alice fell down _____ hurt her feet.

(and, or)

4. The king is rich _____ the beggar is poor.

(and, but)

5. Derek is inside the house _____ Jonathan is outside the house.

(but, or)

6. Polly likes crossword puzzles _____ Martha likes jigsaw puzzles.

(and, but)

7. Mike has a pet rabbit _____ a squirrel.

8. The band practiced for two hours, _____ they still did not sound very well.

(but, and)

9. I earned 10/10 on my spelling test, _____ my dad gave three chocolates. (so, and)

10. I was late for class in the morning _____ the bus was lat

WORKSHEET

NAME: _____

CLASS:3

Underline the correct spelling of the word in brackets to complete the rhyme.

Betty Met A Yeti

Betty met a (yeti, yeti)

in the mountains of Tibet

She cooked him some (spaghetti, spagheti)

and baked him a (baguette, baguete)

and when the food was ready

and the dishes all were set

the yeti (swallowed,swallowed) Betty

and said,"Mmmmmm. The best one yet."

So that's the end of Betty,

But you needn't be (upset, upsett)

Unless you meet a yeti

In the (mowntains, mountains) of Tibet.

Then just stay calm and (steddy, steady)

Don't be (nervous, nervus)

And don't cook him spaghetti

Or, who knows what you might get?

ANSWER THE QUESTIONS BELOW

1. What do you think a Yeti is?

2. Where did Betty meet the Yeti?

3. What did Betty cook the yeti?

4. What did Betty bake the yeti?

5. What did the yeti say after swallowing Betty?

6. Do you think the yeti exist?



DELHI PUBLIC SCHOOL UDHAMPUR

WORKSHEET

NAME: _____

CLASS: 3

Read the passage below and answer the questions that follows.

Forests are part of the world that have a lot of trees. Some forests are smaller than others, but a popular feature of all forest is to have lots of trees and vegetation, or plant life. In a forest there are tons of different trees, plants, and animals. Animals in a forest range from different types of mammals, birds, and insects. One of the most popular types of forest are rain forests. Other types of forests are deciduous forests, and coniferous forests.

1. What does vegetation mean?

2. What kind of animals are in a forest?

3. Name two types of forests.

4. What is a popular feature of all forest?



DELHI PUBLIC SCHOOL UDHAMPUR

WORKSHEET

NAME: _____

CLASS: 3

MESSAGE WRITING

Your teacher was looking for Saumil to return his Art notebook. When she couldn't find him, she gave it to you. Complete the message below to leave at Saumil's table.

.....

.....

.....

Your Art notebook is

Our teacher returned it when.....

I am going to

See you after.....

.....

Complete each sentence with the correct punctuation. Each answer will be one of the following: ! . ?

1. Jia loves to help his dad cook dinner__
2. What do you think Jia and his dad will cook tonight ____
3. Please close the door __
4. Ouch ____ The stove is hot __
5. Do you have any money left in your pocket __
6. "Oh no __", Jean yelled.



दिल्ली पब्लिक स्कूल, उधमपुर

विषय :- हिन्दी

कक्षा :- तीसरी






मुहावरे और अपठित गद्यांश

नाम कक्षा दिनांक

1. मुहावरों को उनके सही अर्थ से रेखा खींचकर मिलाइए -

- | | |
|----------------------|---------------------------|
| क. आँख लगना | (i) बहुत खुश होना |
| ख. फूला न समाना | (ii) बहुत गुस्सा होना |
| ग. हाथ-पाँव फूल जाना | (iii) जिस पर कोई असर न हो |
| घ. चिकना घड़ा | (iv) नींद आ जाना |
| ङ. आग बबूला होना | (v) घबरा जाना |

2. चित्रों की सहायता से मुहावरे पूरे करके लिखिए -

- | | |
|---|-------|
| क.  दिखाना | |
| ख.  खट्टे करना | |
| ग.  का  | |
| घ.  खुलना | |

3. निम्नलिखित मुहावरों का वाक्य में प्रयोग कीजिए -

कमर कसना, मक्खी मारना, नानी याद आना, नाक में दम करना

.....

.....

.....

.....

.....

4. लिंग बदलकर वाक्य दोबारा लिखिए-

③

(क) पिता जी घूमने जाते हैं।
.....

(ख) लड़की फल खा रही है।
.....

(ग) राजा पलंग पर सोता है।
.....

5. सर्वनाम शब्दों को रेखांकित कीजिए-

④

(क) मैं अपनी माँ से बहुत प्यार करती हूँ।

(ख) तुम्हारे पास मेरी एक किताब है।

(ग) उन्हें गाना गाने का शौक है।

(घ) आप मेरी बात ध्यान से सुनिए।

6. विशेषण शब्दों पर गोला लगाइए-

④

(क) मेरी माँ बहुत सुंदर है।

(ख) नीता की साड़ी हरी और लाल है।

(ग) कोयल मधुर स्वर में गाती है।

(घ) मनु के पास पाँच पेंसिलें हैं।

7. विलोम शब्द लिखिए-

④

(क) आधा - (ख) मीठा -

(ग) उजाला - (घ) सूखा -

8. दो-दो पर्यायवाची शब्द लिखिए-

- (क) मानव =
(ख) वस्त्र =
(ग) आकाश =
(घ) संसार =

9. शुद्ध वर्तनी लिखिए-

- (क) दिपावली -
(ख) अर्शावाद -
(ग) कयोंकी -
(घ) तीथी -

10. अनेक शब्दों के लिए एक शब्द लिखिए-

- (क) जहाँ पढ़ने जाते हैं
(ख) हर रोज़ होने वाला
(ग) दूसरे देश की वस्तु
(घ) जो खेती करता हो

11. क्रिया शब्दों को रेखांकित कीजिए-

- (क) बच्चा सोने जा रहा है।
(ख) रवि चित्र बनाता है।
(ग) चीता तेज़ दौड़ता है।
(घ) दरज़ी कपड़े सिल रहा था।

Delhi Public School, Udhampur

WORKSHHET – I

Session 2018-19

Class:- 3rd
Subject:- Math
Duration:-

Max.Marks:-
Time

Name: -

Roll

no.

General Instructions:-

1. Attempt all Questions.
2. Read the questions very carefully.
3. Neatness in hand writing is expected.

Q1. Construct a line segment PQ of length 9cm.

Q2. Fill in the blanks:

- 1) Polygon made of three line segments is a
- 2) The opposite sides of aare equal.
- 3) Aandhave no vertices.
- 4) Aandhave 6 plane faces.

Q3. Write the fractions in number:

- 1) Two – seventh
- 2) One – seventh

Q4. Write (P) for proper fraction and (I) for improper fraction:

- 1) $\frac{3}{10}$
- 2) $\frac{13}{12}$

Q5. Write the following fractions in descending order: $\frac{9}{8}$, $\frac{6}{8}$, $\frac{2}{8}$, $\frac{5}{8}$, $\frac{1}{8}$

Q6. Rahul walked $\frac{7}{9}$ km from home to school and $\frac{2}{9}$ km from school to her friend's house. What distance he walked in all?

Delhi Public School, Udhampur

WORKSHHET – II

Session 2018-19

Class:- 3rd
Subject:- Math
Duration:-

Max. Marks:-
Time

Name: -

Roll

no.

.....

General Instructions:-

1. Attempt all Questions.
2. Read the questions very carefully.
3. Neatness in hand writing is expected.

Q1. Write the appropriate unit to measure the following:

- 1) Weight of an adult 2) A cough syrup

Q2. Arrange in vertical column and add or subtract:

- 1) Subtract 17 l 100 ml from 19 l 215 ml 2) Add 14 l 150 ml and 26 l 215 ml

Q3. Convert the following into gram:

- 1) 7 kg 544 g 2) 9 Kg 261 g

Q4. Convert the following into meters:

- 1) 8 km 2) 7 km 119 m

Q5. Convert the following centimeters to meters and centimeters:

1) 184 cm

2) 694 cm

Delhi Public School, Udhampur

WORKSHHET – III

Session 2018-19

Class:- 3rd
Subject:- Math
Duration:-

Max. Marks:-
Time

Name: -
.....

Roll

no.

General Instructions:-

1. Attempt all Questions.
2. Read the questions very carefully.
3. Neatness in hand writing is expected.

Q1. Write time in another way:

- | | |
|----------------------------|-------------------------|
| 1) Half past 4 | 3) Quarter to 6 |
| 2) 10 minutes past 6 | 4) Quarter past 4 |

Q2. Write the appropriate time from the bracket:

- | | |
|------------------------------|------------------------|
| 1) 9:30 in the morning | 3) 4:00 at night |
| 2) 12:30 in a day | |

Q3. Write the name of the months that have 30 days:

- | | |
|----------|----------|
| 1) | 3) |
| 2) | 4) |

Q4. Write the name of the months that have 31 days:

- | | | |
|----------|----------|----------|
| 1) | 4) | 7) |
| 2) | 5) | |
| 3) | 6) | |

Q5. Write the following dates in numerals:

- | | |
|-------------------------|---------------------------|
| 1) March 29, 2017 | 2) December 9, 2016 |
|-------------------------|---------------------------|

Q6. Write the following date in the names format: 14-10-2019

Q7. Complete it:

1) 1 leap year =days

3) 1 hour =minutes

2) 1 minute =seconds

4) 1 day =hours

Delhi Public School, Udhampur

WORKSHHET – IV

Session 2018-19

Class:- 3rd
Subject:- Math
Duration:-

Max. Marks:-
Time

Name: -

Roll

no.

.....

General Instructions:-

1. Attempt all Questions.
2. Read the questions very carefully.
3. Neatness in hand writing is expected.

Q1. Find the product of:

1) Rs 21.73

x4

2) Rs 171.81

x 9

Q2. Subtract Rs 78.91 from Rs 96.71

Q3. Add 173 rupees 25 paise and 107 rupees 87 paise.

Q4. Complete it:

- 1) The symbol for Indian rupees is
- 2) Rs 1 =Paise
- 3) The line that divides a figure into two equal parts is the
- 4) Even + Even =number.

Q5. Write the number that comes next in the series:

1) 11, 22, 33,,,

2) 40, 50,,,

3) 5, 10,,,

Q6. Observe the pattern and complete the series:

1) RS, SR, RS,,

M, N, O, M, N, O,,,



DELHI PUBLIC SCHOOL, UDHAMPUR

WORKSHEET:- 1

Name: _____

Class: 3rd

Section: _____

Subject: S.S.T

Q.1 Multiple choice questions:-

- We should walk on the _____ side of the road.
(a) Left (c) South
(b) Right (d) North
- We should cross the road only at _____ crossing.
(a) Zebra (c) Crow
(b) Lion (d) Pigeon
- _____ started an efficient postal service in his empire.
(a) Sher Shah Suri (c) Akbar
(b) Birbal (d) Shah Jahan
- Post office provide us with _____.
(a) Postcard (c) Envelops
(b) Inland letter (d) All of these
- _____ is an example of mas communication.
(a) Newspaper (c) (a) & (b) only
(b) Radio (d) E-mail
- _____ moved from one place to another in search of food.
(a) Nomad (c) Insects
(b) Birds (d) Amphibian
- Early humans used _____ to cover their body.
(a) Clothes (c) Wool
(b) Sweaters (d) Leaves
- Unscramble this letter OSPT to form meaningful word.
(a) POST (c) OSPT
(b) TOSP (d) SOPT

9. _____ is an important means of water transport.

(a) Boat

(c) Train

(b) Ship

(d) option (b) & (c) only

10. Unscramble this letter OARDI to form a meaningful word.

(a) RADIO

(c) DIARO

(b) DARIO

(d) ARDIO



DELHI PUBLIC SCHOOL, UDHAMPUR

WORKSHEET:- 2

Name: _____

Class: 3rd

Section: _____

Subject: S.S.T

Q1. Fill in the blanks:-

1. _____ and _____ are used to cover long distance.

2. _____ and _____ are the modes of travelling in air.

3. Animals like _____ and _____ are used for travelling.

4. I can talk as well as send _____ through mobile.

5. _____ and _____ are the means of personal communications.

Q2. Match the column:-

Column A

1. Courier

2. Satellite

3. ILEMOB

4. SEDOC

5. Village

Column B

MOBILE _____

Parcel _____

Live telecast _____

Tongas _____

CODES _____



DELHI PUBLIC SCHOOL, UDHAMPUR

WORKSHEET:- 3

Name: _____

Class: 3rd

Section: _____

Subject: S.S.T

Q1. Fill in the blanks:-

1. Early humans were _____ and _____.

2. Early humans made tools out of stone and used them as _____.

3. Early humans led a life of a _____.

4. _____ and _____ are the things that we eat without cooking them.

5. _____ is a small leafless branch of a plant.

Q.2 Match the column:-

Column A

Column B

1. Animal skin

cook food _____

2. Stone

protect from cold _____

3. Fire

spark _____

4. Odisha

river valley _____

5. Narmada

stone age site _____



WORKSHEET:- 4

Name: _____

Class: 3rd

Section: _____

Subject: S.S.T

Q1. Fill in the blanks:-

- The early humans discovered the idea of_____.
- A large section of a trunk of a tree is known as_____.
- Animals like _____ and _____ were used for transportation.
- The wheel used for pottery was known as_____.
- The wheel was used for making _____ out of clay.

Q.2 Match the column:-

Column A		Column B
1. Fire	scared by fire	_____
2. Stone age sites	Warmth,light	_____
3. Wild animals	Israel	_____
4. Raft	travel on land	_____
5. Sledge	travel on water	_____
6. Animal	invented	_____
Wheel	domestic	_____

DELHI PUBLIC SCHOOL, UDHAMPUR

REVISION WORKSHEET: COMPUTER

NAME: _____

DATE: _____

CLASS: 3()

ROLL NO.: _____

Q:1. Answer the following

Export to Image option present

in _____

1. Speed option which will execute one command at a time in KTurtle

2. Shortform of forward command is _____

3. Pane which is present on the right of the screen in KTurtle window is

4. KTurtle was developed by _____

2. Key which is used to execute the

command _____



DELHI PUBLIC SCHOOL, UDHAMPUR

REVISION WORKSHEET: COMPUTER

NAME: _____

DATE: _____

CLASS: 3()

ROLL NO.: _____

Q:1. Give the commands of the following:

Task	Command
1. Move the turtle 80 steps forward	
2. Turn the turtle 110 degrees to the left	
3. Change the canvas color to blue	
4. Shortform of clear is	
5. Change the pen color to green	
6. Unit of measurement of an angle or a turn	
7. Change the pen size to 5	

Q:2. Give the shortcut form of the following:

1. Turnright _____

2. Turnleft _____

3. Forward _____

4. Backward _____



DELHI PUBLIC SCHOOL, UDHAMPUR

REVISION WORKSHEET: COMPUTER

NAME: _____

DATE: _____

CLASS: 3()

ROLL NO.: _____

Eight color-coded blocks

Area where blocks are snapped

Block Description

Cat

Script area

Green Flag

Default Sprite

To start the execution of a project



DELHI PUBLIC SCHOOL, UDHAMPUR
REVISION WORKSHEET: COMPUTER


NAME: _____

DATE: _____

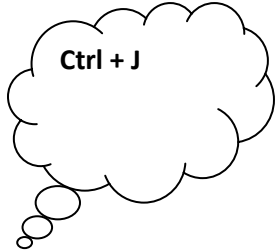
CLASS: 3()

ROLL NO.: _____

Q:1.Match the following:



**Character option
present in**

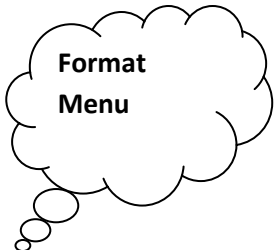


**Default font in
Writer is**

**New option
present in**



**Shortcut key of
Justify is**





DELHI PUBLIC SCHOOL UDHAMPUR

Worksheet –
Session 2018-19

Class:- 3rd
Subject:- Science

Q.1. Tick (✓) the correct answers.

(Class Assignment)

- (a) The causes winds.
(i) Moon (ii) Saturn (iii) Sun
- (b) During the day, cool breeze blows from the towards the land.
(i) sea (ii) trees (iii) atmosphere
- (c) In summers, the days are than winters.
(i) shorter (ii) longer (iii) beautiful
- (d) Heavy rainfall causes
(i) snowfall. (ii) drought. (iii) floods.
- (e) and harm the crops.
(i) Snow, dew (ii) Frost, fog (iii) Frost, hail
- (f) condenses to form water drops that come down in the form of rain.
(i) Cloud (ii) Dew (iii) water vapour
- (g) The is the condition of the atmosphere around us.
(i) season (ii) climate (iii) weather

Q.2. Write 'T' for true and 'F' for false sentences.

(Class Assignment)

- (a) Land breeze blows during the night.
- (b) Our lifestyle does not depend upon the weather and climate of a place.
- (c) Noon is the coldest time of the day.
- (d) We feel uncomfortable on a hot and humid day.
- (e) Heavy snowfall blocks the roads.



DELHI PUBLIC SCHOOL UDHAMPUR

CLASS _____

Q.1. Look at the pictures given below, identify the birds and the types of beaks they have. Write in the given blanks.

(a)



.....
.....

(b)



.....
.....

(c)



.....
.....

(d)




.....
.....

(e)



.....
.....

(f)



.....
.....

Q.2. Read the sentences and name the birds. Use the Help Box. Also, write one use of each type of feet.

HELP BOX

paddy birds owls *mynah* woodpeckers quail

- (a) This bird has toes with sharp, horny claws:
-
- (b) These birds have three toes in front and one toe behind:
-
- (c) They have thin, long legs with widespreading toes:
-
- (d) They have two toes in front and two toes behind:
-
- (e) These birds have very strong and sharp claws:
-

Q.3. Read the clues given below and identify the birds. Use the Help Box.

HELP BOX

swallow owl parrot swan quail

- (a) I eat insects and seeds buried under earth.
- (b) I am an expert swimmer.
- (c) I have a very sticky tongue.
- (d) I can move only the upper part of my beak.
- (e) I have curved beak for tearing flesh.

Q.4. How do feet and claws help a bird?

(Home Assignment)

- (a)
- (b)
- (c)

