



# DELHI PUBLIC SCHOOL UDHAMPUR

NAME:- \_\_\_\_\_

CLASS:- 4<sup>th</sup> ( )

**" I heard the bells on Christmas day**

**Their old familiar carols play**

**And wild and sweet**

**The words repeat**

**Of peace on earth, Good will to men"**

# HAPPY NEW YEAR 2019

With this note we wish our students great vacations our only request to parents is to enjoy the winter but its too cold also, so do take care of our tiny to tots.

# HAPPY WINTER VACATIONS



Winter holidays begin from 1<sup>st</sup> Jan, 2019. School will reopens on 16th Jan 2019



# DELHI PUBLIC SCHOOL UDHAMPUR

## UNSEEN COMPREHENSION

NAME: \_\_\_\_\_

CLASS: 4

**Read the passage below and answer the questions that follow.**

Alexander Graham Bell invented the telephone. He was a teacher of the deaf in Boston. At night, he worked on experiment using a telegraph. Once when the metal in the telegraph stuck, Bell's assistant plucked the metal to loosen it. Bell, who was in another room, heard the sound in his receiver. He understood that the vibrations of the metal had travelled down the electric current to the receiver. He continued to work on this idea.

March 10, 1876 was the first time Alexander Graham Bell successfully spoke words over a telephone line. He was about to test a new transmitter when he spilled some battery acid on his clothes. He cried out to his assistant who was in another room, "Mr. Watson, come here! I want you! Watson heard every word clearly on the telephone and rushed into the room.

Bell demonstrated his invention to many people. Over time, more and more telephone lines were installed, and people began to use the invention in their homes and businesses.

### **LET'S FIND OUT.**

- 1. Who invented the telephone?**
-

2. What was his regular job?

---

3. What did Mr. Bell say to Mr. Watson during the first telephone conversation?

---

4. Who was Mr. Watson?

---

## WORKSHEET-2

NAME : \_\_\_\_\_

CLASS: 4

### All My Great Excuses

Read the poem below 'All My Great Excuses' and fill in the gaps with the past simple tense of the verb in the brackets.

I \_\_\_\_\_ (start) on my homework

but my pen \_\_\_\_\_ (run) out of ink.

My hamster \_\_\_\_\_ (eat) my homework.

My computer's on the blink.

I accidentally \_\_\_\_\_ (drop) it

in the soup my mom was cooking.

My brother \_\_\_\_\_ (flush) it down the toilet

when I wasn't looking.

My mother \_\_\_\_\_ (run) my homework

through the washer and the dryer.

An airplane \_\_\_\_\_(crash) into our house.

My homework was on fire.

Tornadoes \_\_\_\_\_(blow) my notes away.

Volcanoes \_\_\_\_\_(strike) our town.

My notes \_\_\_\_\_(are) taken hostage  
by an evil killer clown.

Some aliens abducted me.

I \_\_\_\_\_(have) a shark attack.

A pirate \_\_\_\_\_(swipe) my homework  
and \_\_\_\_\_(refuse) to give it back.

I \_\_\_\_\_(work) on this excuses  
so darned long my teacher said,  
“I think you’ll find it easier  
to do the work instead.”

NAME: \_\_\_\_\_

CLASS:4

Underline the correct spelling of the word in brackets to complete the rhyme

### I Think My Dad Is Dracula

I think my dad is Dracula,

I know that sounds (insane, insain, insane)

but (lissen, listen, listen) for a moment and

allow me to (explaine, explane, explain).

We don't live in a (cassle, castle, kastle),

and we never sleep in (caves, kaves, caves).

But, still, there's something ( weard, weird, weerd)

about the way my dad (behaves, beehaves, behaves)

I never see him go out

in the (datime, daytime, daythyme) when it's light.

He (sleeps, sleaps, sleps) all day till evening,

then he leaves the house at night.

He comes home in the (morning, moorning, morning)

saying, "Man, I'm really dead!"

He (kises, kisses) us goodnight, and then

by (sunrise, sunrise) he's in bed.

My mom heard my (suspicion,suspishion)  
and he said, "You're not (too,to) swift.  
Your father's not a (vampire,vampire)  
He just works the (graveyard,graaveyard) shift".

-Kenn Nesbitt

**Answer the questions below**

1. Give two reasons why the author thinks his dad might be Dracula.

---

2. When does Dad leave the house?

---

3. What does Dad say when he arrives home?

---

4. What is Dad's job?

---

WORKSHEET -4

Read each sentence and add the correct punctuation mark. Then, label it; **imperative, assertive, interrogative** or **exclamatory**.

Example A: You did an excellent job.

Answer: You did an excellent job. Assertive

1. How was your day in school \_\_\_ \_\_\_\_\_
2. Do your assignment on time \_\_\_ \_\_\_\_\_
3. I'm so excited I passed my test \_\_\_ \_\_\_\_\_
4. Walking up that mountain is dangerous \_\_\_ \_\_\_\_\_
5. Who is the most popular singer \_\_\_ \_\_\_\_\_
6. he is the leader of the group \_\_\_ \_\_\_\_\_
7. What is your favorite magazine \_\_\_ \_\_\_\_\_
8. Congratulation on your achievement \_\_\_ \_\_\_\_\_
9. That was a physical game \_\_\_ \_\_\_\_\_
10. Can you cancel the concert \_\_\_ \_\_\_\_\_
11. What chapter are we reading \_\_\_ \_\_\_\_\_
12. Ouch \_\_\_ \_\_\_\_\_
13. Sara ate a slice of pizza for a lunch \_\_\_ \_\_\_\_\_
14. Isn't this a beautiful night \_\_\_ \_\_\_\_\_
15. It rained all day long \_\_\_ \_\_\_\_\_
16. When is your birthday \_\_\_ \_\_\_\_\_



# DELHI PUBLIC SCHOOL UDHAMPUR

## WORKSHEET

NAME : \_\_\_\_\_

CLASS: 4

### All My Great Excuses

Read the poem below 'All My Great Excuses' and fill in the gaps with the past simple tense of the verb in the brackets.

I \_\_\_\_\_ (start) on my homework

but my pen \_\_\_\_\_ (run) out of ink.

My hamster \_\_\_\_\_ (eat) my homework.

My computer's on the blink.

I accidentally \_\_\_\_\_ (drop) it

in the soup my mom was cooking.

My brother \_\_\_\_\_ (flush) it down the toilet

when I wasn't looking.

My mother \_\_\_\_\_ (run) my homework

through the washer and the dryer.

An airplane \_\_\_\_\_ (crash) into our house.

My homework was on fire.

Tornadoes \_\_\_\_\_ (blow) my notes away.

Volcanoes \_\_\_\_\_ (strike) our town.

My notes \_\_\_\_\_ (are) taken hostage



by an evil killer clown.

Some aliens abducted me.

I \_\_\_\_\_(have) a shark attack.

A pirate \_\_\_\_\_ (swipe) my homework

and \_\_\_\_\_ (refuse) to give it back.

I \_\_\_\_\_(work) on this excuses

so darned long my teacher said,

“I think you’ll find it easier

to do the work instead.”




# दिल्ली पब्लिक स्कूल, उधमपुर

विषय :- हिन्दी

कक्षा :- चौथी

विलोम शब्द और कहानी लेखन

नाम ..... कक्षा ..... दिनांक .....

1. बाईं ओर लिखे शब्दों के सही विलोम पर गोला  लगाइए -

क. सरल	-	कठिन	मुश्किल	कठोर
ख. गुण	-	बुराई	दोष	अच्छाई
ग. मित्र	-	दुश्मन	बैरी	शत्रु
घ. विजय	-	अजय	जय	पराजय

2. वर्ग पहिली में से दिए गए शब्दों के विलोम चुनकर लिखिए -

न	अ	शा	ति	हर्ष	-	.....	गरीब	-	.....
वी	मी	शो	दा	देवता	-	.....	प्राचीन	-	.....
न	र	क	न	कठिन	-	.....	स्वर्ग	-	.....
स	र	ल	व	आज	-	.....	शांति	-	.....

3. निम्नलिखित वाक्यों में रंगीन शब्द के विलोम लिखकर रिक्त स्थान भरिए -

- क. आप हमारे स्वामी हैं, हम तो मात्र ..... हैं।
- ख. सूर्य पूर्व दिशा में ..... होता है और पश्चिम में अस्त।
- ग. मेरे लिए तो यह जीवन- ..... का प्रश्न है।
- घ. उतना ही व्यय करो जितनी ..... हो।
- ङ. साक्षी के सामने तो तुम उसकी प्रशंसा कर रही थीं, उसके जाते ही ..... करने लगीं।



## क्रिया एव अशुद्धि शोधन

नाम ..... कक्षा ..... दिनांक .....

1. निम्नलिखित वाक्यों में क्रिया शब्दों के नीचे रेखा खींचिए और लिखिए कि क्रिया अकर्मक है या सकर्मक -

- क. शुभम कहानी पढ़ रहा है। .....
- ख. मालती ठंडे पानी से नहाती है। .....
- ग. रोहित जोर-जोर से हँसने लगा। .....
- घ. आओ, हम सब क्रिकेट खेलें। .....
- ङ. मोहन! जल्दी से दूध पी लो। .....
- च. शतुरमुर्ग बहुत तेज दौड़ता है। .....

2. क्रिया का सही रूप लिखकर वाक्य पूरे कीजिए -

- क. बच्चे लुका-छिपी .....। (खेलना)
- ख. मीना आज स्कूल नहीं .....। (जाना)
- ग. अरुण रोज़ सुबह सैर करने .....। (जाना)
- घ. अणिमा ने पिताजी को चिट्ठी .....। (लिखना)
- ङ. भैया आप जन्मदिन पर मुझे क्या .....। (देना)

3. शब्दों की सही वर्तनी के नीचे रेखा खींचिए -

- |              |           |          |           |
|--------------|-----------|----------|-----------|
| क. ग्रहकार्य | गृहक्राय  | गृहकार्य | ग्रहक्राय |
| ख. दवाईयाँ   | दवाइयाँ   | दवाईया   | दवईयाँ    |
| ग. क्रपया    | क्रप्या   | किरपया   | कृपया     |
| घ. प्रार्थना | प्राथर्ना | प्राथना  | परार्थना  |

पुरुषवाचक सर्वनाम

निश्चयवाचक

अनिश्चयवाचक

प्रश्नवाचक

संबंधवाचक

4. निम्नलिखित वर्ग पहेली में से विशेषण शब्द चुनकर लिखिए -

मी	सु	हा	ना	प
ठा	द	क	व	ह
ग	र	म	थो	ला
पाँ	व	धु	ड़ा	ल
च	तु	र	नी	ची

.....

.....

.....

.....

.....

5. विशेषण शब्दों के नीचे रेखा खींचिए और उनके प्रकार लिखिए -

क. मीता साहसी लड़की है।

.....

ख. इतना बड़ा घर तुम्हारा है!

.....

ग. सुधा चौथी कक्षा में पढ़ती है।

.....

घ. गिलास में थोड़ा पानी बचा है।

.....

ङ. वह किताब उठा लाओ।

.....

च. मेरे कुरते में दो मीटर कपड़ा लगता है।

.....

छ. सुधा की कक्षा में चालीस छात्र हैं।

.....

## वाक्यांशों के लिए एक शब्द व निबंध लेखन

नाम .....

कक्षा .....

दिनांक .....

1. निम्नलिखित वाक्यांशों के लिए एक शब्द लिखिए -

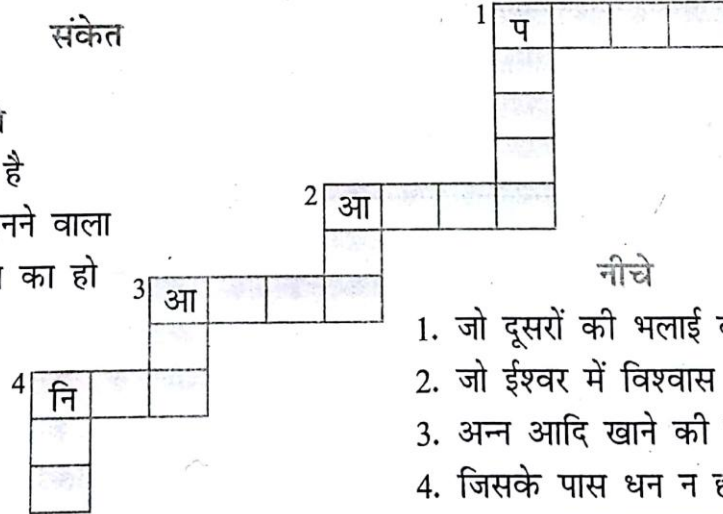
- जो पढ़ाने का काम करता है .....
- जहाँ तरह-तरह की पुस्तकें रखी जाती हैं .....
- जो मांस-मछली नहीं खाता .....
- जिसके हृदय में दया हो .....
- जो कुछ जानने की इच्छा रखता हो .....
- जिसका मूल्य न आँका जा सके .....
- महीने में एक बार होने वाला .....
- जो सत्य बोलता है .....

2. संकेतों की सहायता से वाक्यांशों के लिए एक शब्द लिखकर शब्द सीढ़ी बनाइए -

संकेत

सीधे-सायने

1. जो परिश्रम करता है
2. बड़ों की आज्ञा मानने वाला
3. जो आज के समय का हो
4. जिसे डर न लगे



नीचे

1. जो दूसरों की भलाई करे
2. जो ईश्वर में विश्वास रखता है
3. अन्न आदि खाने की वस्तु
4. जिसके पास धन न हो





# Delhi Public School, Udhampur

## WORKSHEET – I

Session 2018-19

---

Class:- 4<sup>th</sup>

Subject:- Math

---

Name: - .....

Roll

no.

.....

### General Instructions:-

1. Attempt all Questions.
2. Read the questions very carefully.
3. Neatness in hand writing is expected.

**Q1. Arrange in vertical column and add:**            450g 783mg; 265g 505mg

**Q2. Arrange in vertical column and subtract:**    775 l 300 ml from 967 l 800 ml

**Q3.** Unit for measuring the distance from Delhi to Agra .....

**Q4. Which is greater?**    9 kg 950g ..... 9590g

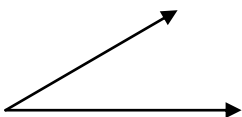
**Q5.** Find the perimeter of triangle whose side are 7cm, 8cm, 9cm.

**Q6.** Find the perimeter of square whose sides are 8cm.



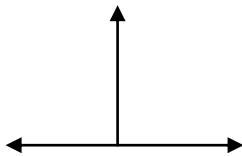
**Q7. Identify the following:**

1)



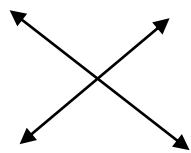
.....  
.....

2)




.....

3)



4)



.....

# Delhi Public School, Udhampur

## WORKSHEET – II

Session 2018-19

Class:- 4<sup>th</sup>  
Subject:- Math  
Duration:-

Max. Marks:-  
Time

Name: - .....  
.....

Roll

no.

### General Instructions:-

1. Attempt all Questions.
2. Read the questions very carefully.
3. Neatness in hand writing is expected.

Q1. 10 kg oranges cost Rs 2000. What is the cost of 1 kg oranges?

Q2. Cost of 1 kg potatoes is Rs 30. What is the cost of 10 kg potatoes?

Q3. Write the short form:  $100 + 80 + 1 + \frac{5}{10} + \frac{6}{100} + \frac{8}{1000} \rightarrow$

Q4. Write the expanded form: 967.821  $\rightarrow$

Q5. Write the fraction for 9.856  $\rightarrow$

Q6. Give the place value of underlined digit: 7.689  $\rightarrow$  .....

Q7. Write the time in figures:

- 1) 5 minutes to 9 .....
- 2) Quarter past 7 .....

**Q8. Fill in the blanks:**

1) Quadrilateral has .....sides.

3) Pentagon has .....sides.

2) Heptagon has .....sides.

4) Octagon has .....sides.

# Delhi Public School, Udhampur

## WORKSHEET – III

Session 2018-19

---

Class:- 4<sup>th</sup>  
Subject:- Math  
Duration:-

Max. Marks:-  
Time

---

Name: - .....

Roll

no.

.....

### General Instructions:-

1. Attempt all Questions.
2. Read the questions very carefully.
3. Neatness in hand writing is expected.

**Q1.** Find the LCM of 3 and 6

**Q2.** Find the HCF of 12, 16.

**Q3.** Find the factors of 28.

### Q4. Fill in the blanks:

1) Numbers that have only two factors i.e. 1 and number itself called

.....

2) Numbers that have more than two factors are called .....

3) .....is a unique number.

4) The number 725 is divisible by .....

**Q5.** Find the prime factors of 48 by factor tree method.

- Q6. Write the 4<sup>th</sup> multiple of 15 → .....
- Q7. All even numbers are multiples of .....
- Q8. The smallest composite odd number is .....

**Delhi Public School, Udhampur**  
**WORKSHEET – IV**  
**Session 2018-19**

**Class:- 4<sup>th</sup>**  
**Subject:- Math**  
**Duration:-**

**Max. Marks:-**  
**Time**

**Name: -** .....

**Roll**

**no.**

**General Instructions:-**

1. Attempt all Questions.
2. Read the questions very carefully.
3. Neatness in hand writing is expected.

Q1. Find the following:  $\frac{7}{9}$  of 54 →

Q2. Convert mixed fraction into improper fraction:  $3\frac{11}{14}$  →

Q3. Arrange in ascending order:  $\frac{3}{4}$ ,  $\frac{7}{8}$ ,  $\frac{2}{3}$

Q4. Add:  $\frac{2}{5} + \frac{7}{9}$

Q5. Subtract:  $\frac{3}{6} - \frac{3}{9}$

**Q6. Complete it:**

- 1) Fractions with same denominators are called .....
- 2) 42 is an .....fraction.
- 3) 1 is a .....fraction.
- 4) 18 is .....fraction.

E. Name the following:

1. The morning star. \_\_\_\_\_
2. The planet farthest from the earth. \_\_\_\_\_
3. The red planet. \_\_\_\_\_
4. The planet with largest number of satellites. \_\_\_\_\_
5. The planet which has no moon. \_\_\_\_\_

F. Define the following:

1. Equator \_\_\_\_\_
2. Mantle \_\_\_\_\_
3. Volcano \_\_\_\_\_
4. Lava \_\_\_\_\_
5. Magma \_\_\_\_\_

G. Answer the following questions.

1. What do you mean by the rotation of the earth?
2. What do you mean by the revolution of the earth?
3. What is the difference between a star and a planet?
4. Name the imaginary lines passing through the earth.
5. Discuss the solar system in brief.

### Brain Sharpening Questions

1. What will happen if the earth stop revolving around the sun?
2. Why do the volcanoes erupt?



# DELHI PUBLIC SCHOOL UDHAMPUR

WORK SHEET NO. -

CLASS:-  
SUBJECT:-

## A Give one word for the following:

- (a) Dense cloud of water droplets, just above the ground \_\_\_\_\_.
- (b) Tiny drops of water in clouds freeze to form \_\_\_\_\_.
- (c) Water vapour condenses on touching cold surface, forming \_\_\_\_\_.
- (d) Amount of water vapour present in air is called \_\_\_\_\_.
- (e) Wind blowing from land to sea at night \_\_\_\_\_.

## B Answer the following questions:

- (a) What is the difference between dew and frost?

---

---

- (b) Why is fog dangerous?

---

---

- (c) How can you save water?

---

---

- (d) Why do people feel uncomfortable in hot and humid weather?

---

---

- (e) Mornings and evenings are cooler than afternoons. Why or why not?

---

---

## c Higher order thinking questions:

- (a) Why the water does not evaporate from your water tanks?

---

---

- (b) You know that fog is condensed water droplets. What is smog?

---

---



# DELHI PUBLIC SCHOOL UDHAMPUR

WORK SHEET NO.

CLASS:-  
SUBJECT:-

FILL IN THE BLANKS WITH THE HELP OF HELP BOX

**HELP  
BOX**

revolution west/east equator northern hemisphere magma

- (a) Mantle consists of molten rocks called .....
- (b) The part of the Earth above the equator is called the .....
- (c) The movement of the Earth around the Sun is called .....
- (d) Places near the ..... are always hot.
- (e) The Earth rotates from ..... to ..... on its axis.

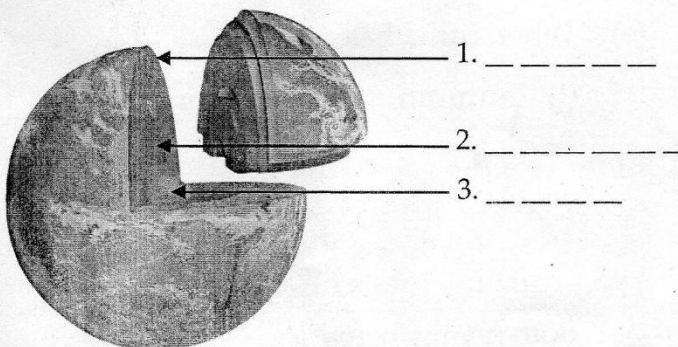
What is meant by the following terms?

(Class Assignment)

- (a) Rotation: .....
- (b) Revolution: .....

Answer the following questions.

- (a) Label the diagram given alongside. What does the diagram represent?



- (b) Where do we live?
- (c) What does '2' consist of?
- (d) What does '3' consist of?






# DELHI PUBLIC SCHOOL UDHAMPUR

Worksheet –  
Session 2018-19

Class:- 4<sup>th</sup>  
Subject:- Science



## A. Multiple Choice Questions (MCQs).

Choose the correct answer from the following:

1. A process of change of water, into water vapour is called  
a. evaporation                      b. condensation                      c. sedimentation
2. When raindrops freeze to form balls of snow, it is called  
a. mist                                  b. hailstones                          c. dog
3. Water vapour in the air condenses to form water droplets on the grass is called  
a. frost                                  b. dew                                  c. fog
4. One of the following plays an important role in the change of weather.  
a. Sun                                      b. Moon                                      c. Rotation of earth

## B. Fill in the blanks.

1. The repeated change of water to water vapour and then back to water is called the \_\_\_\_\_.
2. The \_\_\_\_\_ gets heated faster than water.
3. Water takes time to \_\_\_\_\_ down as well as to get \_\_\_\_\_.
4. Cool breeze blows from land to the sea at night is called \_\_\_\_\_.
5. The level of underground water in a place is called \_\_\_\_\_.

## C. State whether the given statements are True or False.

1. Use of unsafe water can cause disease.
2. Filtration is the process of purification of water.
3. Insoluble impurities of water are removed by sedimentation.
4. Land cools down faster than water.
5. Very thick mist is called fog.



# DELHI PUBLIC SCHOOL, UDHAMPUR

## WORKSHEET:- 1

Name: \_\_\_\_\_

Class: 4<sup>th</sup>

Section: \_\_\_\_\_

Subject: S.S.T

### Q.1 Multiple choice questions:-

- The impure form of mineral is called \_\_\_\_\_.  
(a) Bronze  (c) Copper   
(b) Ore  (d) Iron
- \_\_\_\_\_ mineral is used by vehicles.  
(a) Petroleum  (c) option (a) &(b) only   
(b) Diesel  (d) Kerosene
- \_\_\_\_\_ has largest cattle strength in the world.  
(a) India  (c) Russia   
(b) U.S.A  (d) Africa
- Places where minerals are found are called \_\_\_\_\_.  
(a) Mines  (c) Pipes   
(b) Ores  (d) Vessels
- There are \_\_\_\_\_ types of minerals.  
(a) 2  (c) 5   
(b) 3  (d) 7
- Any type of drink other than water is called \_\_\_\_\_.  
(a) Beverages  (c) Pulses   
(b) Dryfruits  (d) Grain
- Places where goods are manufactured are called \_\_\_\_\_.  
(a) Factories  (c) School   
(b) Buildings  (d) Hospitals
- \_\_\_\_\_ is the major centre of heavy machinery.  
(a) Bhopal  (c) Ahmedabad   
(b) Surat  (d) Varanasi
- There are \_\_\_\_\_ types of industries.  
(a) 3  (c) 4   
(b) 5  (d) 8

\_\_\_\_\_ are the most important factors for the growth of any industries.

- (a) Raw material  (c)  Machinery  
(b) Transport

## WORKSHEET:- 2

Name: \_\_\_\_\_

Class: 4<sup>th</sup>

Section: \_\_\_\_\_

Subject: S.S.T

### Q1. Fill in the blanks:-

1. Oil seed grow well in \_\_\_\_\_ climate
2. India is the largest producer of \_\_\_\_\_ in the world
3. Cotton is a \_\_\_\_\_ crop.
4. \_\_\_\_\_ crop, \_\_\_\_\_ crop are the 2 main crops grown in India
5. \_\_\_\_\_ and \_\_\_\_\_ are the richest state of India in terms of mineral wealth.
6. The process of \_\_\_\_\_ involves digging the earth at certain places to take out the minerals.
7. Coal is also known as \_\_\_\_\_.
8. \_\_\_\_\_ is used for making electric wires, utensils etc.
9. \_\_\_\_\_ and \_\_\_\_\_ are the major centres of automobiles.
10. \_\_\_\_\_ is the major center of textile industry.

**WORKSHEET:- 3**

Name: \_\_\_\_\_

Class: 4<sup>th</sup>

Section: \_\_\_\_\_

Subject: S.S.T

**Q.1 Multiple choice questions:-**

1. The Sarv Shiksha Abhiyan is related to \_\_\_\_\_.  
(a) Education  (c) House   
(b) Job  (d) Factories
2. There are \_\_\_\_\_ major ports in India.  
(a) 13  (c) 18   
(b) 12  (d) 17
3. There are \_\_\_\_\_ minor ports in India.  
(a) 187  (c) 200   
(b) 127  (d) 105
4. \_\_\_\_\_ is the most expensive mode of transport.  
(a) Airways  (c) Roadways   
(b) Waterways  (d) Railways
5. Chhatrapati Shri \_\_\_\_\_ International airport is in \_\_\_\_\_.  
(a) Chennai  (c) Delhi   
(b) Kolkata  (d) Mumbai
6. The \_\_\_\_\_ is highest court of a state.  
(a) High court  (c) Gram court   
(b) Supreme court  (d) District court
7. The Indian Parliament has \_\_\_\_\_ parts.  
(a) 3  (c) 5   
(b) 4  (d) 7
8. Union Government is also known as \_\_\_\_\_.  
(a) Central  (c) Local   
(b) State  (d) Gram sabha
9. \_\_\_\_\_ is the high court of justice in our nation.  
(a) Supreme  (c) Local   
(b) High  (d) District

10. \_\_\_\_\_ is the head of the state.
- (a) Governor  (c) Prime Minister   
 (b) President  (d) Actor

**WORKSHEET:- 4**

**Name:** \_\_\_\_\_

**Class:** 4<sup>th</sup>

**Section:** \_\_\_\_\_

**Subject:** S.S.T

**Q1. Fill in the blanks:-**

- \_\_\_\_\_, \_\_\_\_\_ and \_\_\_\_\_ are the obstacles to the development of human resource.
- India is the \_\_\_\_\_ most populous country in the world.
- \_\_\_\_\_ is one of south Asia's oldest and longest highway..
- The G.T road was built by\_\_\_\_\_.
- There are \_\_\_\_\_ means of transport.

**Q2. Match the column:-**

<b>Column A</b>	<b>Column B</b>	
1. Union Govt.	private airline	_____
2. Delhi	26 Jan 1950	_____
3. Democracy	Indira Gandhi international Airport	_____
4. Fundamental right	Central Govt.	_____
5. Spice Jet	social equality	_____
6. Republic Day	elect representative	_____
7. Socialism		_____

**DELHI PUBLIC SCHOOL, UDHAMPUR**

**REVISION WORKSHEET: COMPUTER**



NAME: \_\_\_\_\_

DATE: \_\_\_\_\_

CLASS: 4( )

ROLL NO.: \_\_\_\_\_

**Q: 1 Name any four parts of scratch:**



**Q:2. Answer the following :**

**1. Repeat block present under**

\_\_\_\_\_

**2. Say block present under**

\_\_\_\_\_

**3. When key pressed block present under**

\_\_\_\_\_

**4. Play Drum block present under**

\_\_\_\_\_



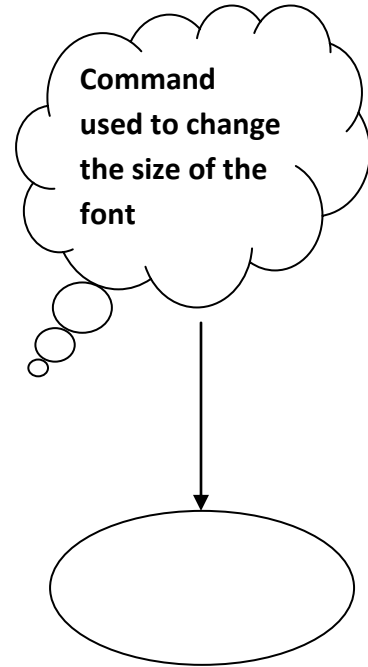
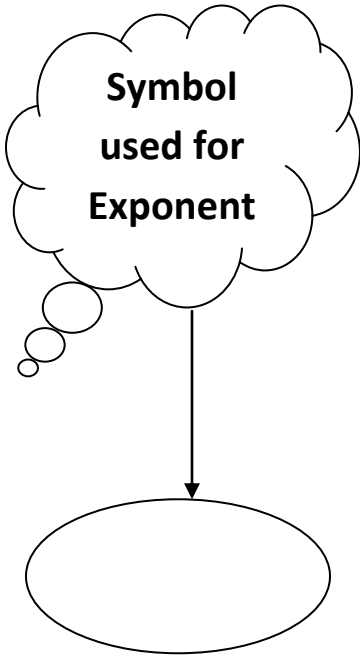


NAME: \_\_\_\_\_

CLASS: 4( )

ROLL NO.: \_\_\_\_\_

Q: Answer the following:





**DELHI PUBLIC SCHOOL, UDHAMPUR**

**REVISION WORKSHEET: COMPUTER**

**NAME:** \_\_\_\_\_

**CLASS: 4( )**

**ROLL NO.:** \_\_\_\_\_

**Q:1. Answer the following:**

1. Small pop-window \_\_\_\_\_

2. Command allows you to input a number or string \_\_\_\_\_

3. Command used to move the turtle to any part of the screen without drawing a line. \_\_\_\_\_

4. Command used to draw pentagon  
\_\_\_\_\_

5. Command used to make the turtle wait for x seconds.  
\_\_\_\_\_

6. Short form of pendown command  
\_\_\_\_\_

7. Variable name is preceded by the character  
\_\_\_\_\_

8. Short form of penup  
\_\_\_\_\_





**DELHI PUBLIC SCHOOL, UDHAMPUR**

**REVISION WORKSHEET: COMPUTER**

**NAME:** \_\_\_\_\_

**DATE:** \_\_\_\_\_

**CLASS:** 4( )

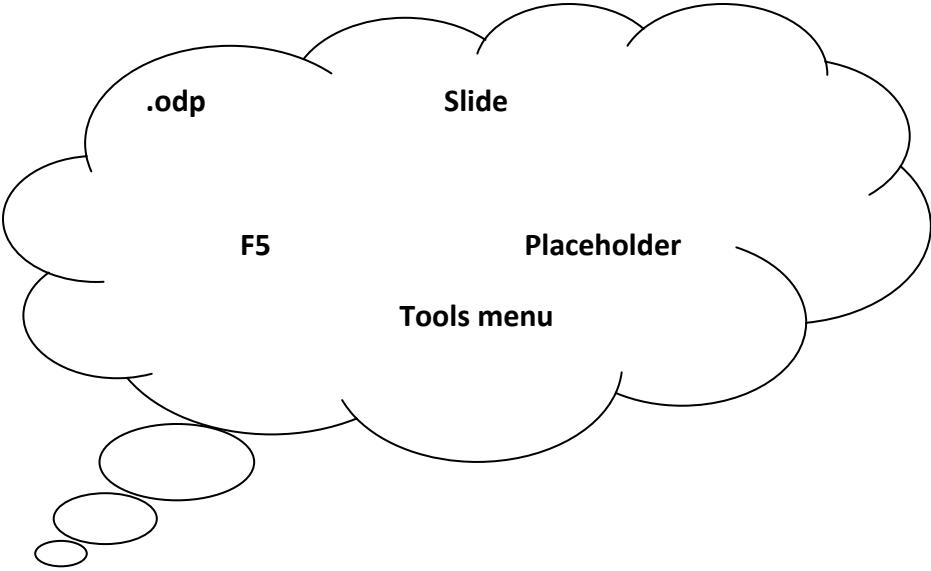
**ROLL NO.:** \_\_\_\_\_

**Q:Answer the following:**

**Extension of a file  
created in  
Impress**

**Gallery option  
present in**

**Individual page  
of a presentation**



**Press key to run  
the slideshow**

**Dotted  
rectangular boxes  
on a slide is called**



